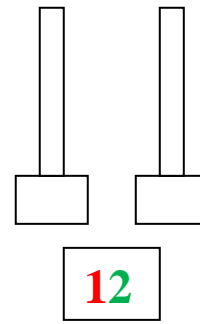
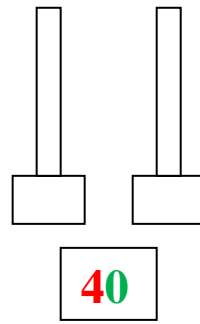
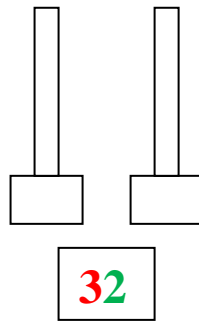
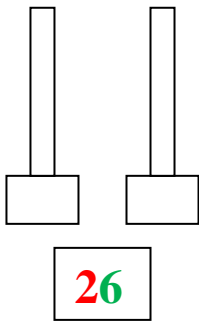
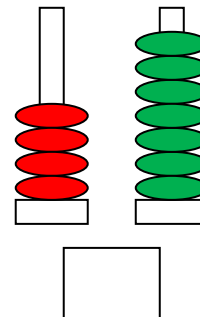
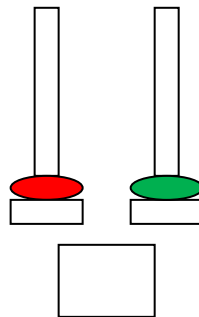
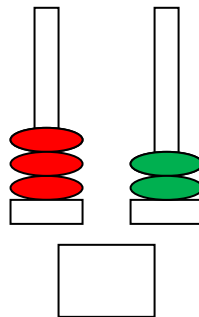
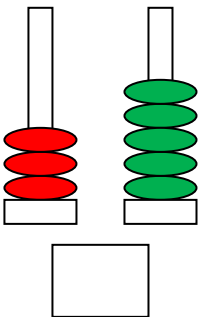


Όνοματεπώνυμο:.....

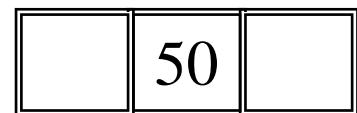
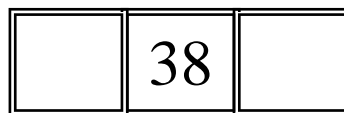
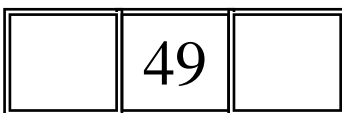
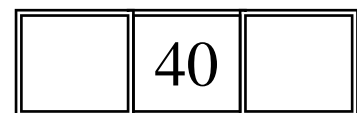
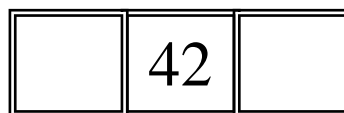
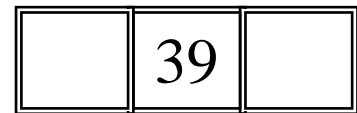
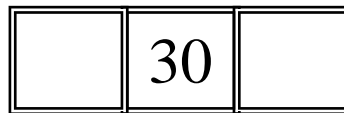
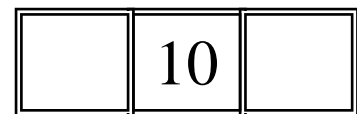
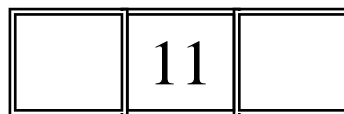
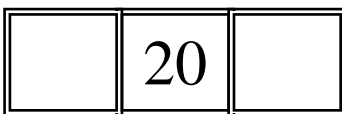
1. Σχεδιάσε τους αριθμούς στους άβακες:



2. Γράψε τους αριθμούς που δείχνουν οι άβακες:



3. Γράφω τον αριθμό που είναι πριν και μετά.



4. Συμπληρώνω τους αριθμούς που λείπουν

$10 + 3 = \dots$ $20 + 8 = \dots$ $30 + 2 = \dots$ $40 + 4 = \dots$ $50 + 1 = \dots$

$28 - 8 = \dots$ $35 - 5 = \dots$ $46 - 6 = \dots$ $55 - 5 = \dots$ $12 - 2 = \dots$

$5 + \dots = 10$ $7 + \dots = 10$ $8 + \dots = 10$ $9 + \dots = 10$ $6 + \dots = 10$

$3 + 4 + 3 = \dots$ $4 + 4 + 2 = \dots$ $5 + 3 + 2 = \dots$ $2 + 2 + 2 = \dots$