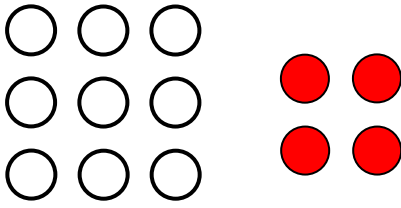
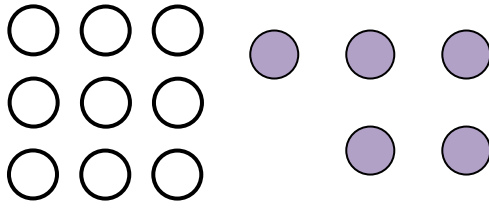
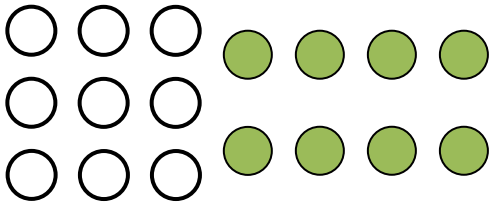
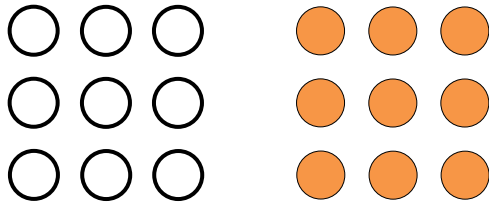
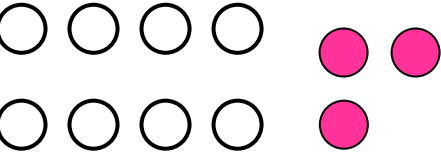
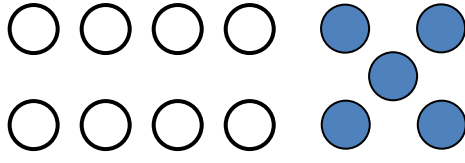
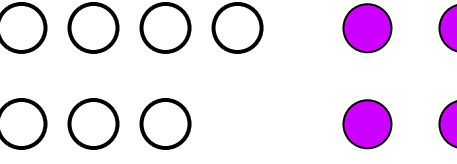
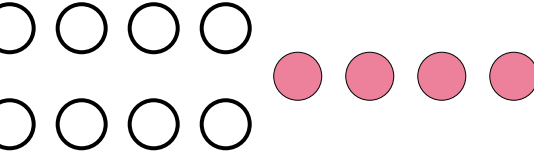






Όνομα:.....

1. Πόσες είναι οι μπάλες; Συμπλήρωσε τις προσθέσεις.

 $9 + 4 = \dots\dots$	 $9 + 5 = \dots\dots$
 $9 + 8 = \dots\dots$	 $9 + 9 = \dots\dots$
 $8 + 3 = \dots\dots$	 $8 + 5 = \dots\dots$
 $7 + 4 = \dots\dots$	 $8 + 4 = \dots\dots$

2. Σχεδίασε όσες μπάλες χρειάζονται και συμπλήρωσε τις μαθηματικές προτάσεις:

	$6 + \dots\dots = 12$
	$8 + \dots\dots = 14$
	$7 + \dots\dots = 14$
	$9 + \dots\dots = 14$